

Answer ALL TWENTY FIVE questions.

Write your answers in the spaces provided.

You must write down all the stages in your working.

1 Show that  $4\frac{2}{3} \div 1\frac{1}{5} = 3\frac{8}{9}$

(Total for Question 1 is 3 marks)



2 A biased spinner can land on green or on yellow or on brown or on pink.

The table gives the probabilities that, when the spinner is spun, it will land on green or on yellow or on brown.

|             |       |        |       |      |
|-------------|-------|--------|-------|------|
| Colour      | green | yellow | brown | pink |
| Probability | 0.32  | 0.13   | 0.28  |      |

Timucin spins the spinner 200 times.

Work out an estimate for the number of times the spinner lands on pink.

(Total for Question 2 is 3 marks)

DO NOT WRITE IN THIS AREA

DO NOT WRITE IN THIS AREA

DO NOT WRITE IN THIS AREA



3  $ABCD$  is a trapezium.

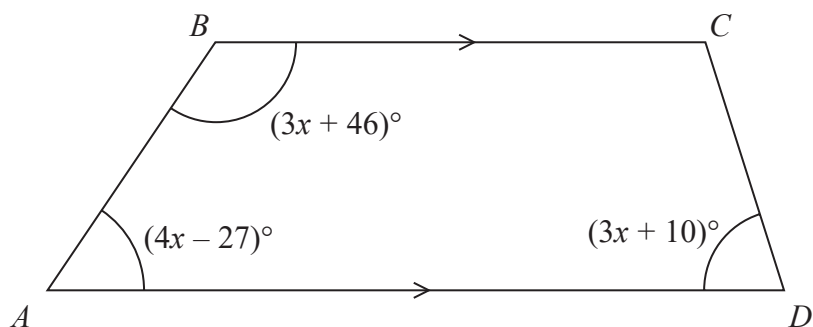


Diagram **NOT**  
accurately drawn

$BC$  is parallel to  $AD$

Find the size of the largest angle inside the trapezium.

(Total for Question 3 is 4 marks)

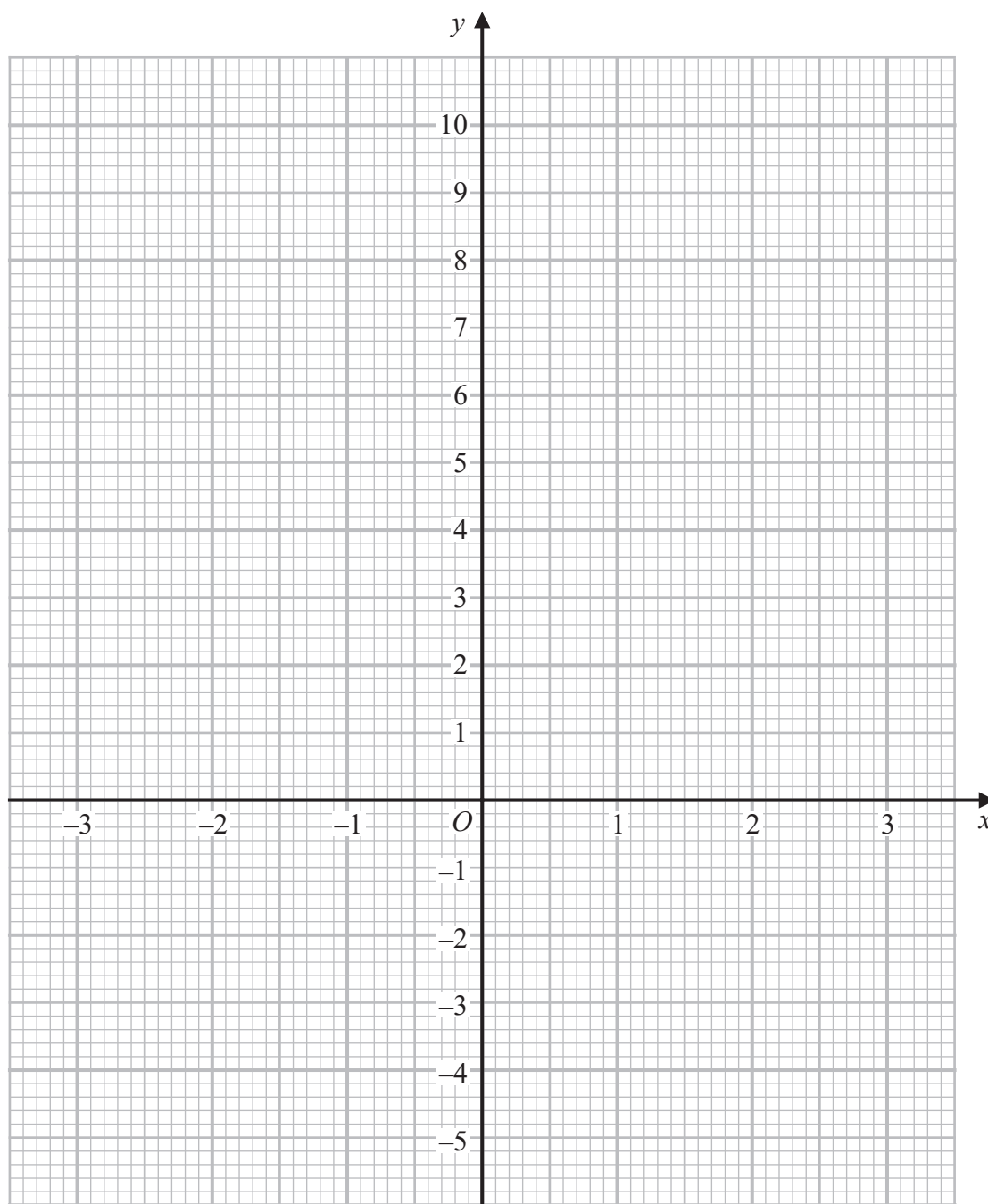


- 4 (a) Complete the table of values for  $y = x^2 - x - 4$

|     |    |    |    |   |    |   |   |
|-----|----|----|----|---|----|---|---|
| $x$ | -3 | -2 | -1 | 0 | 1  | 2 | 3 |
| $y$ |    | 2  |    |   | -4 |   |   |

(2)

- (b) On the grid below, draw the graph of  $y = x^2 - x - 4$  for values of  $x$  from -3 to 3



(2)

(Total for Question 4 is 4 marks)



- 5 Nancy has some coins with a total value of 85 pence.  
She has only 2 pence coins and 5 pence coins.  
The ratio

$$\text{number of 2 pence coins} : \text{number of 5 pence coins} = 1 : 3$$

Nancy has more 5 pence coins than 2 pence coins.

How many more?

(Total for Question 5 is 4 marks)



DO NOT WRITE IN THIS AREA

DO NOT WRITE IN THIS AREA

DO NOT WRITE IN THIS AREA

- 6 (a) Write 76 000 000 in standard form.

.....  
(1)

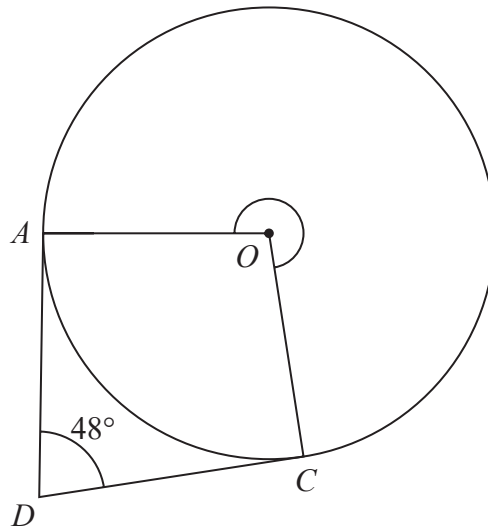
- (b) Write  $5.4 \times 10^{-4}$  as an ordinary number.

.....  
(1)

(Total for Question 6 is 2 marks)



7

Diagram **NOT**  
accurately drawn

$A$  and  $C$  are points on a circle, centre  $O$

$DA$  is the tangent to the circle at  $A$  and  $DC$  is the tangent to the circle at  $C$

Angle  $ADC = 48^\circ$

Work out the size of reflex angle  $AOC$

(Total for Question 7 is 3 marks)



DO NOT WRITE IN THIS AREA

DO NOT WRITE IN THIS AREA

DO NOT WRITE IN THIS AREA

- 8 Charlotte buys a painting for \$680  
The value of the painting increases by 4% each year.
- Work out the value of the painting at the end of 3 years.  
Give your answer correct to the nearest \$

\$.....

(Total for Question 8 is 3 marks)



DO NOT WRITE IN THIS AREA

DO NOT WRITE IN THIS AREA

DO NOT WRITE IN THIS AREA

9 Change a speed of 27 kilometres per hour to a speed in metres per second.

..... m/s

(Total for Question 9 is 3 marks)



10 Team A and Team B take part in a quiz league.

After 11 rounds, Team A has a mean score per round of 17

After 9 rounds, Team B has a mean score per round of 18

Both teams take part in a further round.

After this round, both teams have a mean score per round of 18.5

In the further round, Team A scored more points than Team B.

How many more?

(Total for Question 10 is 4 marks)

DO NOT WRITE IN THIS AREA

DO NOT WRITE IN THIS AREA

DO NOT WRITE IN THIS AREA



- 11 Here is a 9-sided regular polygon  $ABCDEFGHIJ$ , with centre  $O$

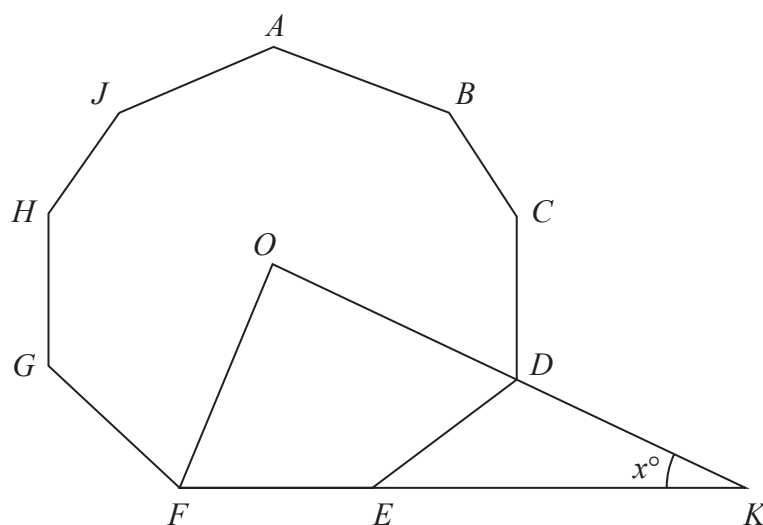


Diagram **NOT**  
accurately drawn

$ODK$  and  $FEK$  are straight lines.

Work out the value of  $x$

$x = \dots\dots\dots$

(Total for Question 11 is 3 marks)



12 The diagram shows right-angled triangle  $ABD$

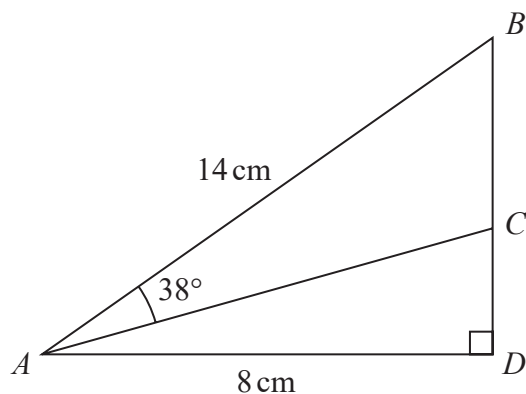


Diagram **NOT** accurately drawn

$$AB = 14 \text{ cm} \quad AD = 8 \text{ cm}$$

$C$  is the point on  $BD$  such that angle  $BAC = 38^\circ$

Work out the length of  $CD$

Give your answer correct to 3 significant figures.

..... cm

(Total for Question 12 is 4 marks)

DO NOT WRITE IN THIS AREA

DO NOT WRITE IN THIS AREA

DO NOT WRITE IN THIS AREA



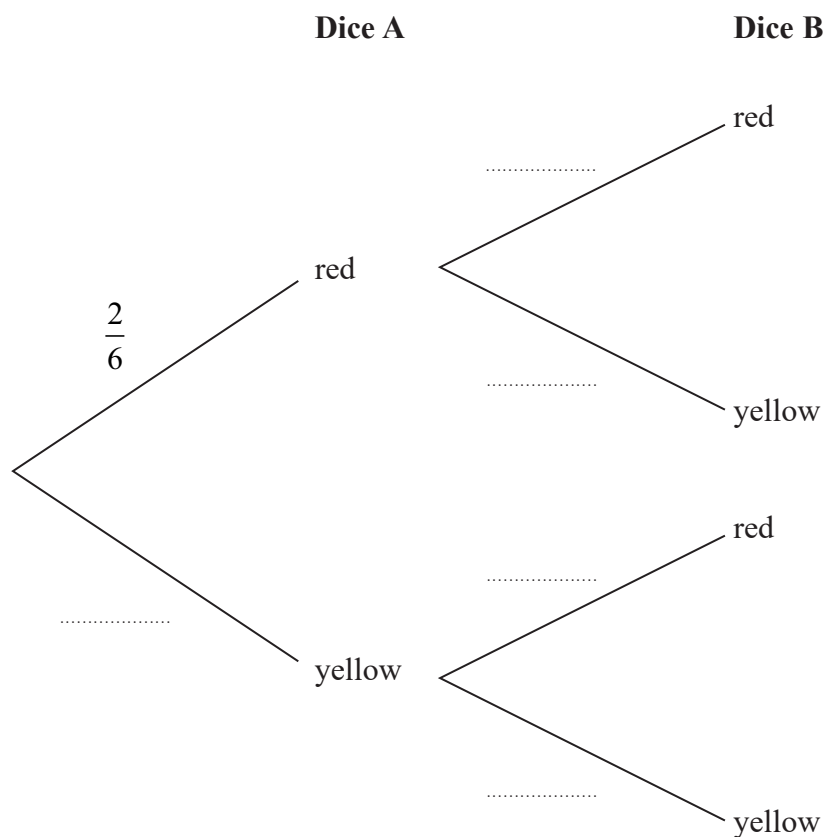
13 Narin has two fair 6-sided dice.

Dice A has 2 red faces and 4 yellow faces.

Dice B has 1 red face and 5 yellow faces.

Narin is going to throw each dice once.

(a) Complete the probability tree diagram.



(2)

(b) Work out the probability that both dice land on yellow.

(2)

(Total for Question 13 is 4 marks)

14

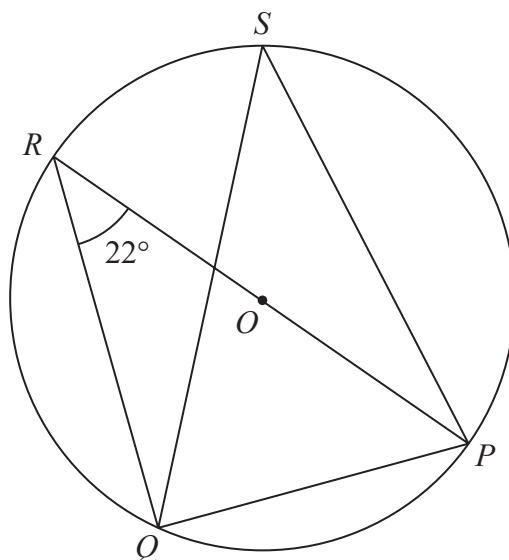


Diagram **NOT**  
accurately drawn

DO NOT WRITE IN THIS AREA

DO NOT WRITE IN THIS AREA

DO NOT WRITE IN THIS AREA

$P$ ,  $Q$ ,  $R$  and  $S$  are points on a circle, centre  $O$   
 $ROP$  is a diameter of the circle.  
 Angle  $PRQ = 22^\circ$

(a) (i) Find the size of angle  $RQP$

.....  
 (1)

(ii) Give a reason for your answer.

.....  
 .....  
 (1)

(b) (i) Find the size of angle  $PSQ$

.....  
 (1)

(ii) Give a reason for your answer.

.....  
 .....  
 (1)

(Total for Question 14 is 4 marks)



15 (a) Simplify fully  $(32a^{15})^{\frac{3}{5}}$

.....  
(2)

(b) Express  $\left(\frac{1}{10x}\right)^{-3}$  in the form  $px^n$  where  $p$  and  $n$  are integers.

.....  
(2)

(c) Solve  $\frac{1-2y}{3} = \frac{4}{5} - \frac{2y-1}{2}$

Show clear algebraic working.

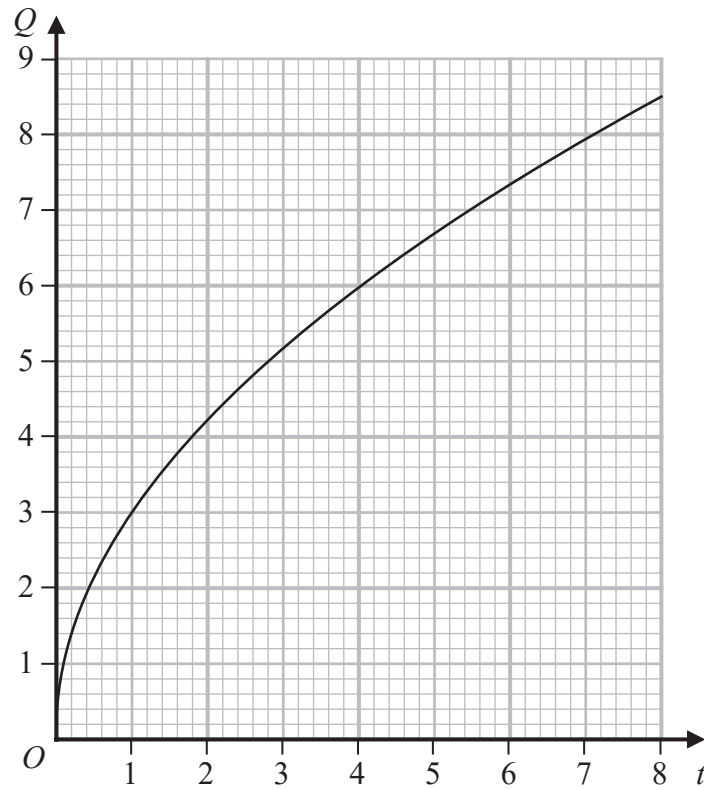
$y =$  .....  
(3)

(Total for Question 15 is 7 marks)



16  $Q$  is directly proportional to  $\sqrt{t}$

The graph shows the relationship between  $Q$  and  $t$  for  $0 < t < 8$



(a) Find a formula for  $Q$  in terms of  $t$

.....  
(3)

$Q$  is increased by 20%

(b) Find the percentage increase in  $t$

..... %  
(2)

(Total for Question 16 is 5 marks)



17 (a) Expand and simplify  $(x + 6)(3x - 2)(x + 6)$

.....  
(3)

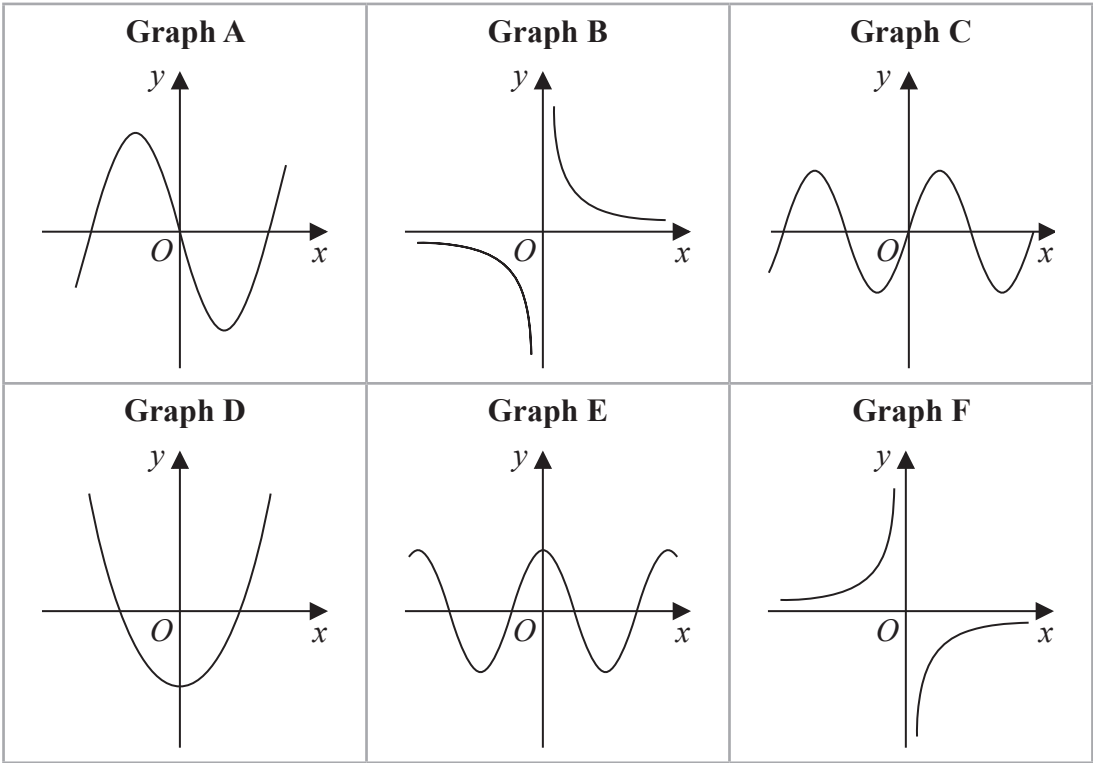
(b) Make  $e$  the subject of  $w = \sqrt{\frac{e + g}{ef - d}}$

.....  
(4)

(Total for Question 17 is 7 marks)



18 Here are 6 graphs.



Complete the table below with the letter of the graph that could represent each given equation.

Write your answers on the dotted lines.

| Equation           | Graph |
|--------------------|-------|
| $y = \sin x$       | ..... |
| $y = -\frac{3}{x}$ | ..... |
| $y = 4x^3 - 5x$    | ..... |

(Total for Question 18 is 3 marks)



DO NOT WRITE IN THIS AREA

DO NOT WRITE IN THIS AREA

DO NOT WRITE IN THIS AREA

19 Express  $3x^2 - 6x + 5$  in the form  $a(x - b)^2 + c$

(Total for Question 19 is 3 marks)



**20** There are 12 counters in a bag.

3 of the counters are red

9 of the counters are green

Ameya, Jack and Ella each take at random one counter from the bag.

Work out the probability that at least one red counter is still in the bag.

DO NOT WRITE IN THIS AREA

DO NOT WRITE IN THIS AREA

DO NOT WRITE IN THIS AREA

(Total for Question 20 is 3 marks)



21 Solve the simultaneous equations

$$\begin{aligned}2x^2 + 3y^2 &= 11 \\ x &= 3y - 1\end{aligned}$$

Show clear algebraic working.

(Total for Question 21 is 5 marks)



- 22 The diagram shows a triangle  $ABC$  and a flagpole  $BF$

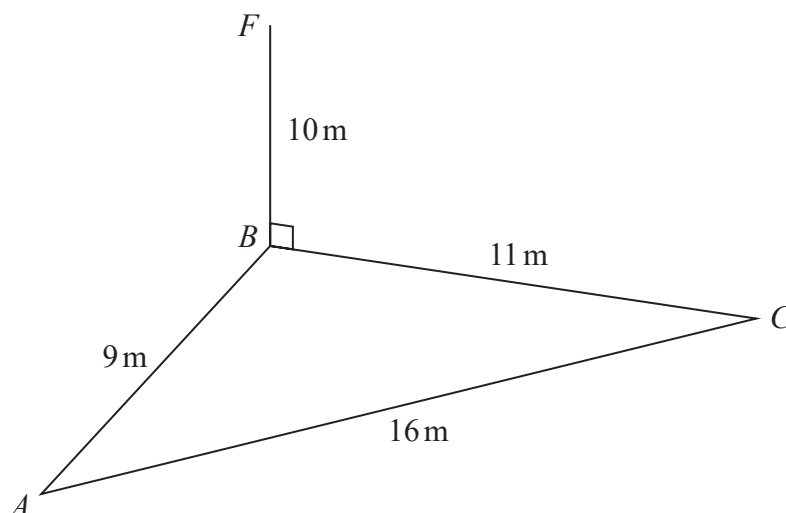


Diagram **NOT**  
accurately drawn

$A$ ,  $B$  and  $C$  are points on horizontal ground.

$BF$  is vertical.

$$AB = 9\text{ m} \quad BC = 11\text{ m} \quad AC = 16\text{ m} \quad BF = 10\text{ m}$$

$D$  is the point on  $AC$  such that angle  $BDC = 90^\circ$

Work out the size of the angle of elevation of the point  $F$  from the point  $D$   
Give your answer correct to one decimal place.

(Total for Question 22 is 5 marks)



- 23 The diagram shows a cuboid with a square cross section.

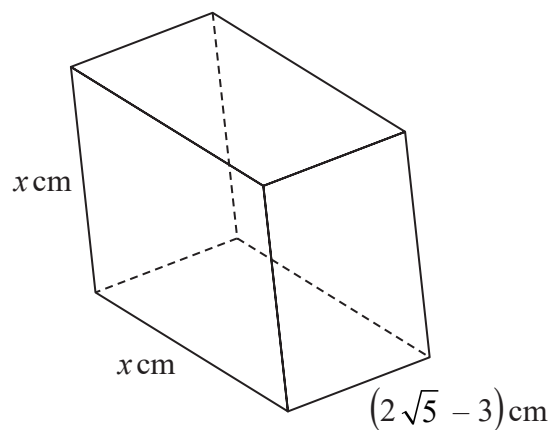


Diagram **NOT**  
accurately drawn

The volume of the cuboid is  $(13 + 6\sqrt{5})\text{cm}^3$

Without using a calculator, find the value of  $x$

Give your answer in the form  $a + \sqrt{b}$  where  $a$  and  $b$  are integers.

Show your working clearly.

$x = \dots\dots\dots$

(Total for Question 23 is 4 marks)

DO NOT WRITE IN THIS AREA

DO NOT WRITE IN THIS AREA

DO NOT WRITE IN THIS AREA



24  $ABCD$  is a kite with  $AB = AD$  and  $CB = CD$

$A$  is the point with coordinates  $(-2, 10)$

$B$  is the point with coordinates  $\left(-\frac{27}{5}, 4\right)$

$C$  is the point with coordinates  $(4, -5)$

Work out the coordinates of  $D$

(....., .....)

(Total for Question 24 is 6 marks)

DO NOT WRITE IN THIS AREA

DO NOT WRITE IN THIS AREA

DO NOT WRITE IN THIS AREA



- 25 A solid sphere has a radius of 2.8 centimetres, correct to 1 decimal place.  
The sphere has a mass of  $M\pi$  grams, where  $M = 260$  correct to 2 significant figures.

Work out the upper bound for the density of the sphere.  
Give your answer in  $\text{g/cm}^3$  correct to 2 decimal places.  
Show your working clearly.

.....  $\text{g/cm}^3$

(Total for Question 25 is 4 marks)

DO NOT WRITE IN THIS AREA

DO NOT WRITE IN THIS AREA

DO NOT WRITE IN THIS AREA

