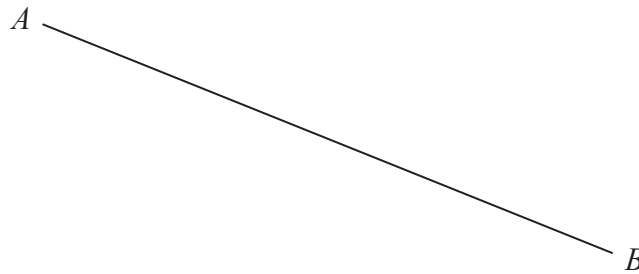


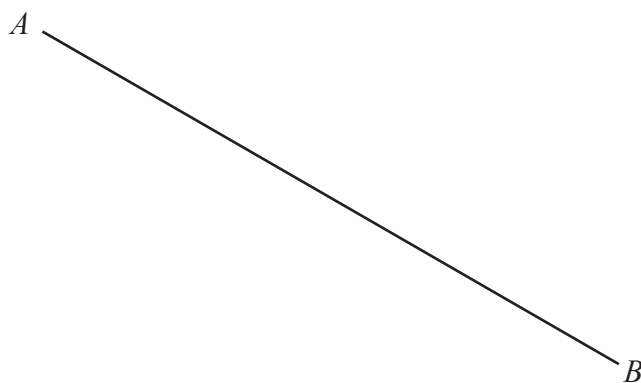
- 3 Use ruler and compasses only to construct the perpendicular bisector of line AB
You must show all your construction lines.



(Total for Question 3 is 2 marks)



- 6 Use ruler and compasses only to construct the perpendicular bisector of the line AB .
You must show all your construction lines.



(Total for Question 6 is 2 marks)



- 2 Use ruler and compasses to construct the perpendicular bisector of the line DE .
You must show all your construction lines.



(Total for Question 2 is 2 marks)

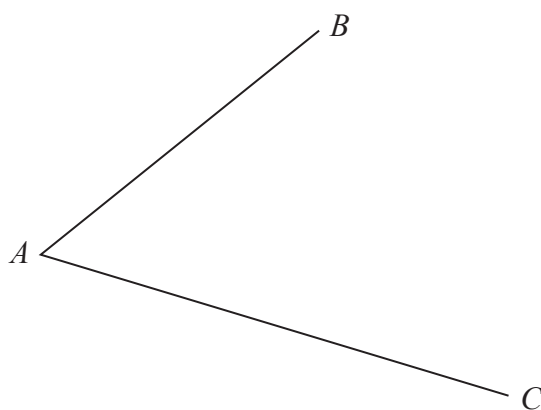
DO NOT WRITE IN THIS AREA

DO NOT WRITE IN THIS AREA

DO NOT WRITE IN THIS AREA



- 5 Use ruler and compasses to construct the bisector of angle BAC .
You must show all your construction lines.



(Total for Question 5 is 2 marks)

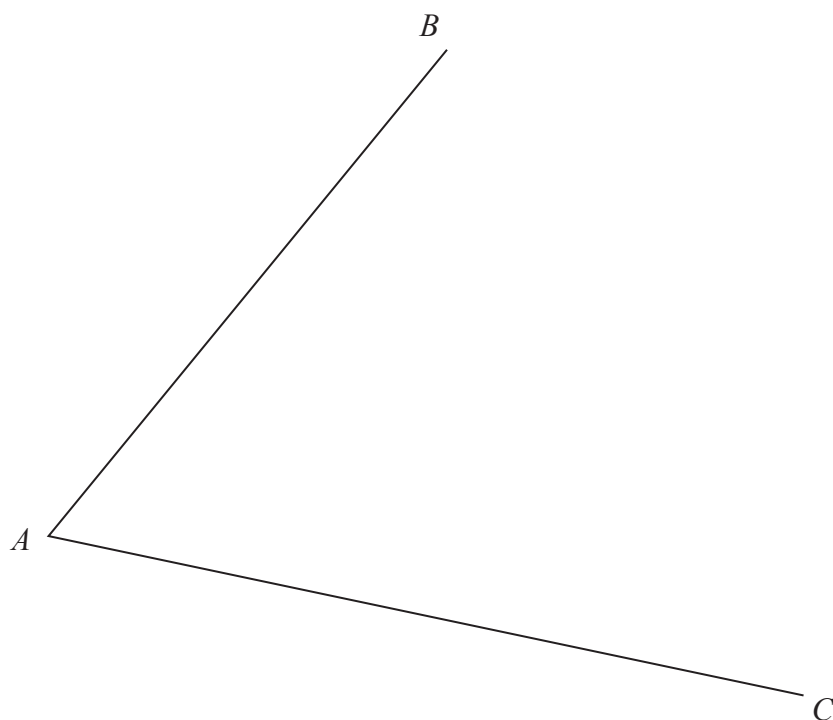
DO NOT WRITE IN THIS AREA

DO NOT WRITE IN THIS AREA

DO NOT WRITE IN THIS AREA



- 4 Using ruler and compasses only, construct the bisector of angle BAC
You must show all your construction lines.

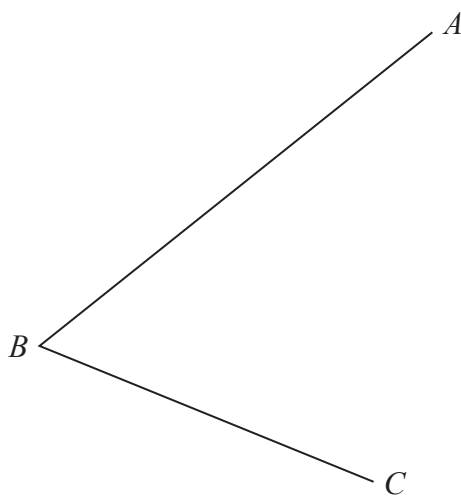


(Total for Question 4 is 2 marks)



P 7 2 4 4 4 4 A 0 5 3 2

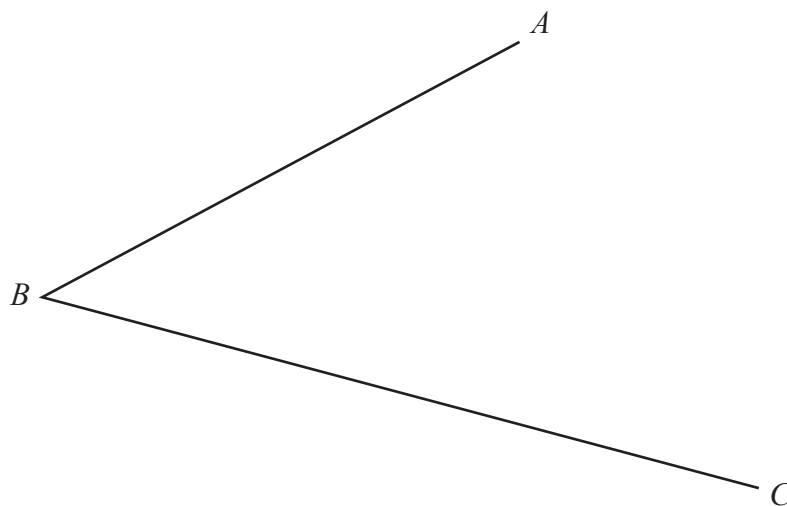
- 2 Using ruler and compasses only, construct the bisector of angle ABC .
You must show all your construction lines.



(Total for Question 2 is 2 marks)



- 2 Use ruler and compasses only to construct the bisector of angle ABC
You must show all your construction lines.



(Total for Question 2 is 2 marks)

DO NOT WRITE IN THIS AREA

DO NOT WRITE IN THIS AREA

DO NOT WRITE IN THIS AREA

