

DO NOT WRITE IN THIS AREA

DO NOT WRITE IN THIS AREA

DO NOT WRITE IN THIS AREA

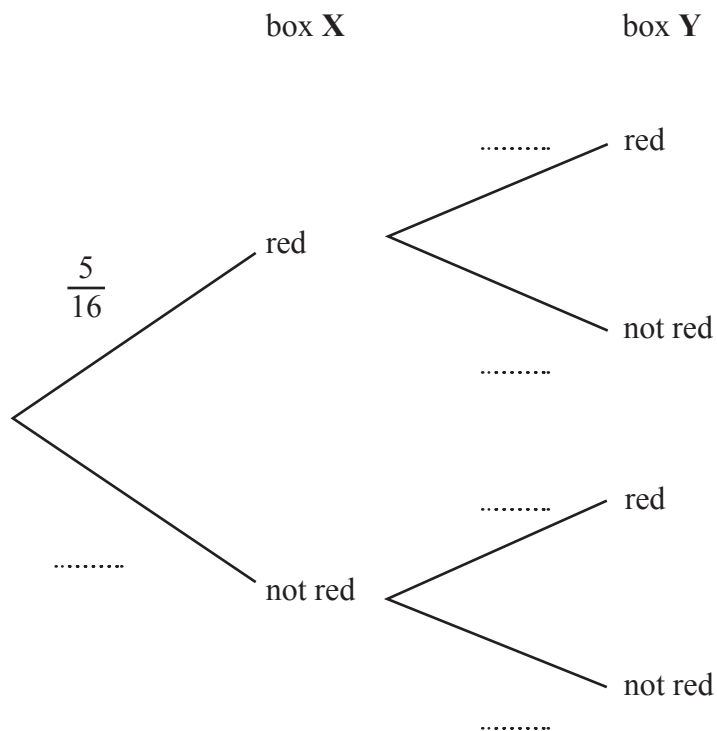
11 Sid has 2 boxes of crayons, box X and box Y

5 of the 16 crayons in box X are red.

7 of the 20 crayons in box Y are red.

Sid takes at random one crayon from box X and one crayon from box Y

(a) Complete the probability tree diagram.



(2)

(b) Work out the probability that Sid takes two crayons that are red or two crayons that are not red.

(3)

(Total for Question 11 is 5 marks)



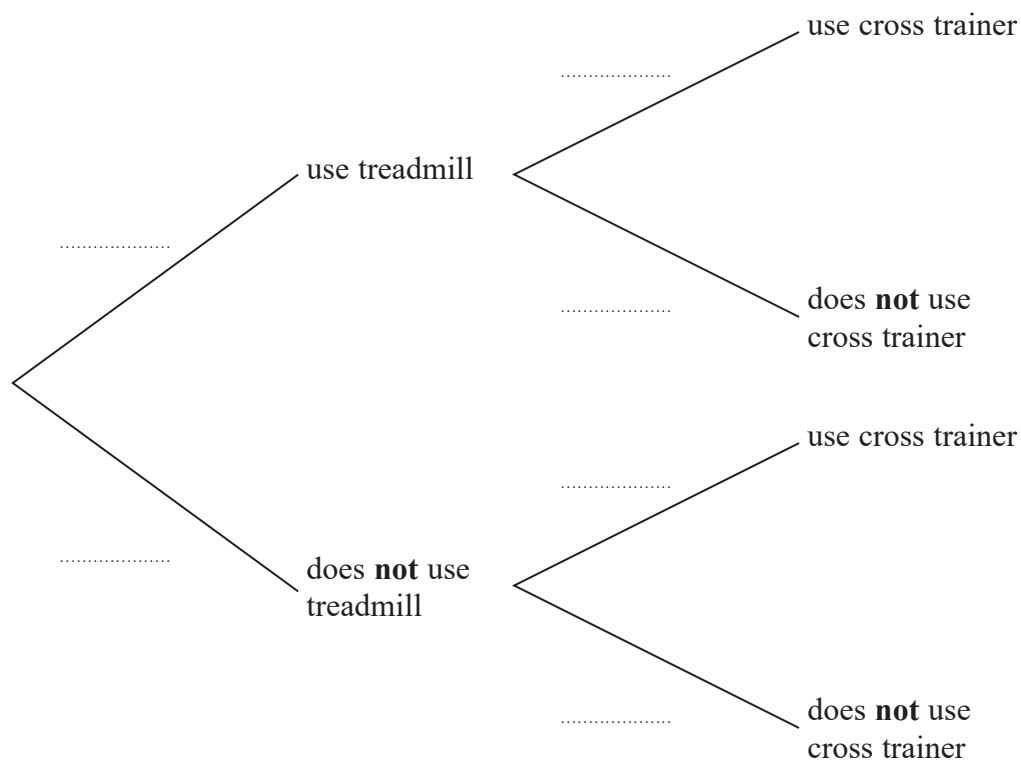
12 Rudolf goes to the gym.

The probability that he will use the treadmill is 0.8

When he uses the treadmill, the probability that he will use the cross trainer is 0.3

When he does **not** use the treadmill, the probability that he will use the cross trainer is 0.6

(a) Complete the probability tree diagram for this information.



(2)

(b) Work out the probability that Rudolf uses both the treadmill and the cross trainer.

(2)

(Total for Question 12 is 4 marks)



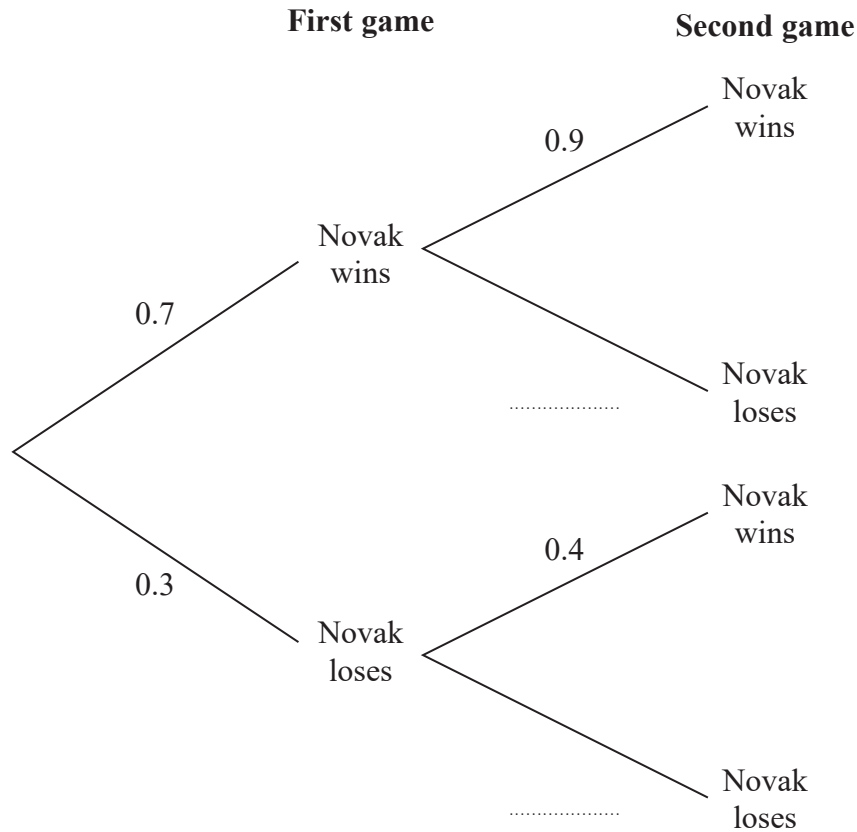
13 Novak is going to play two games of tennis.

The probability that he wins the first game is 0.7

If he wins the first game, the probability that he wins the second game is 0.9

If he loses the first game, the probability that he wins the second game is 0.4

(a) Complete the probability tree diagram.



(1)

(b) Work out the probability that Novak wins both games of tennis.

(2)

(Total for Question 13 is 3 marks)



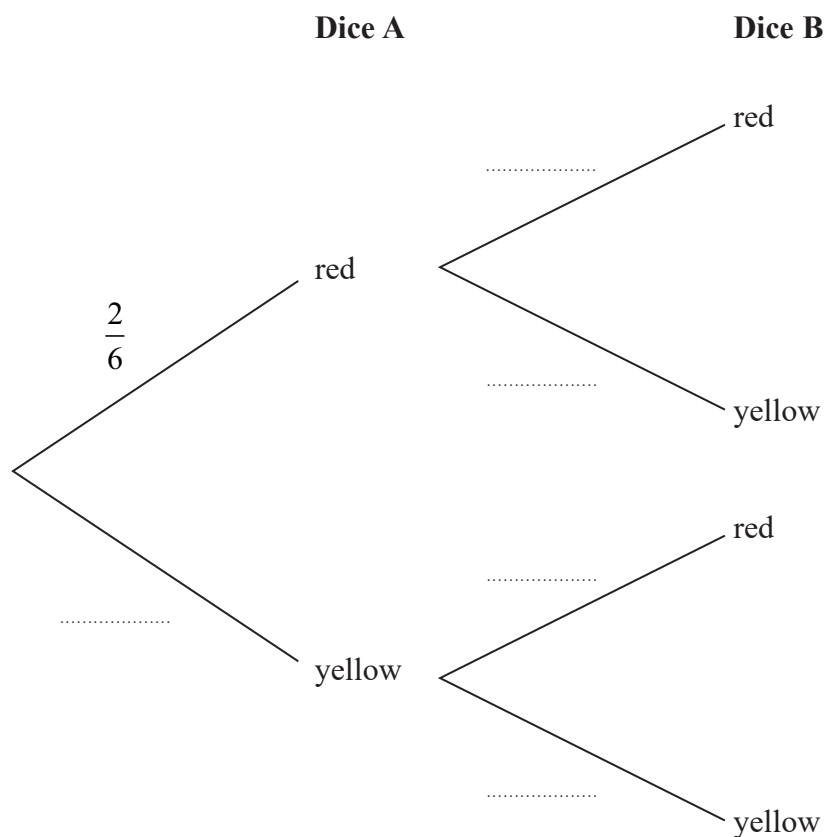
13 Narin has two fair 6-sided dice.

Dice A has 2 red faces and 4 yellow faces.

Dice B has 1 red face and 5 yellow faces.

Narin is going to throw each dice once.

(a) Complete the probability tree diagram.



(2)

(b) Work out the probability that both dice land on yellow.

(2)

(Total for Question 13 is 4 marks)

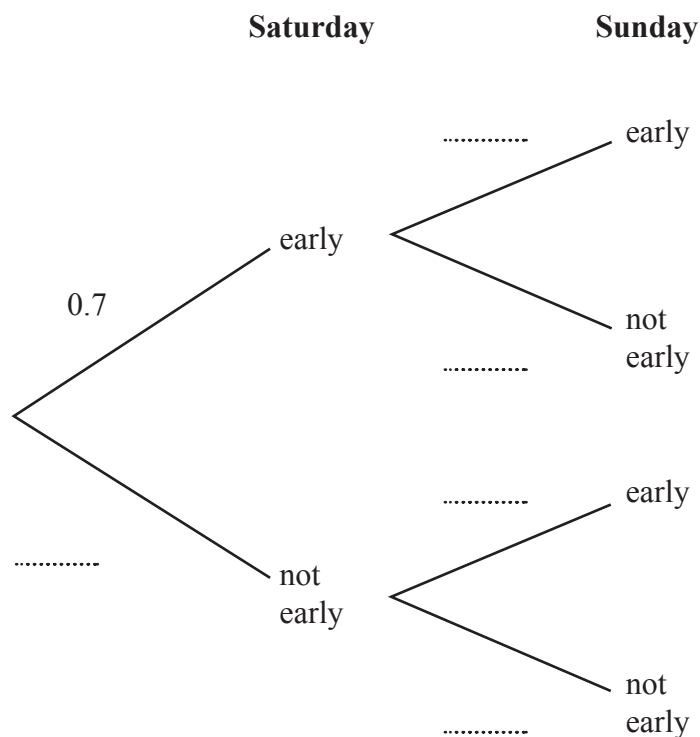


- 13 The probability that Thomas gets to work early on Saturday is 0.7

If Thomas gets to work early on Saturday, the probability that he will get to work early on Sunday is 0.9

If Thomas does **not** get to work early on Saturday, the probability that he will get to work early on Sunday is 0.6

- (a) Use this information to complete the probability tree diagram.



(2)

- (b) Work out the probability that Thomas gets to work early on both Saturday and Sunday.

(2)

(Total for Question 13 is 4 marks)

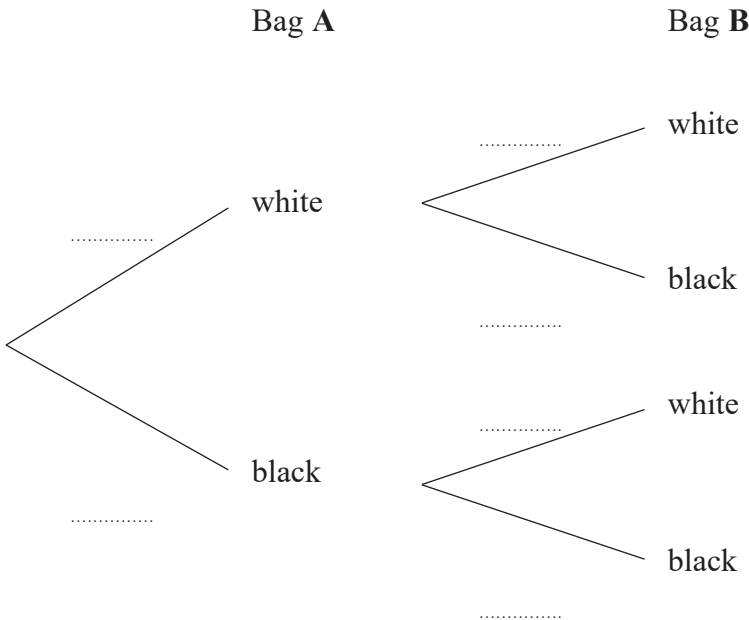


13 Harman has two bags of beads.

In bag A, there are 3 white beads and 7 black beads.
In bag B, there are 5 white beads and 4 black beads.

Harman takes at random a bead from bag A and a bead from bag B

(a) Complete the probability tree diagram.



(2)

(b) Work out the probability that Harman takes two beads of the same colour.

(3)

(Total for Question 13 is 5 marks)

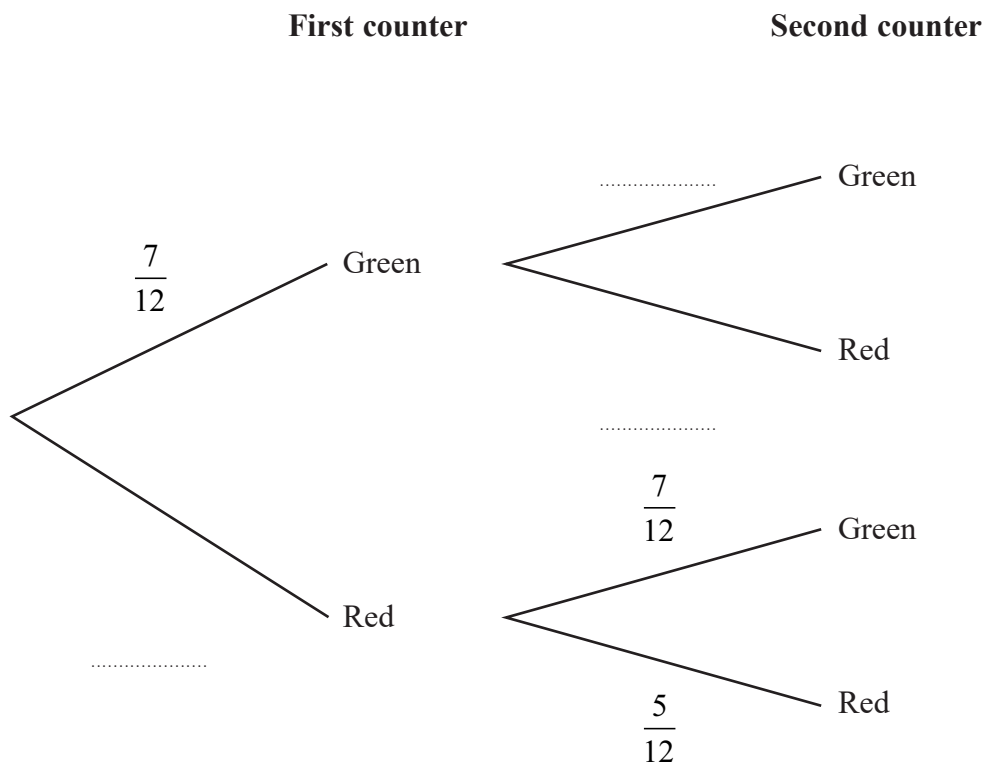


- 13 Hector has a bag that contains 12 counters.
There are 7 green counters and 5 red counters in the bag.

Hector takes at random a counter from the bag.
He looks at the counter and puts the counter back into the bag.

Hector then takes at random a second counter from the bag.
He looks at the counter and puts the counter back into the bag.

- (a) Complete the probability tree diagram.



(2)

- (b) Work out the probability that both counters are red.

(2)

DO NOT WRITE IN THIS AREA

DO NOT WRITE IN THIS AREA

DO NOT WRITE IN THIS AREA



Meghan has a jar containing 15 counters.

There are only blue counters, green counters and red counters in the jar.

Hector is going to take at random one of the counters from his bag of 12 counters.

He will look at the counter and put the counter back into the bag.

Hector is then going to take at random a second counter from his bag.

He will look at the counter and put the counter back into the bag.

Meghan is then going to take at random one of the counters from her jar of counters.

She will look at the counter and put the counter back into the jar.

The probability that the 3 counters each have a different colour is $\frac{7}{24}$

(c) Work out how many blue counters there are in the jar.

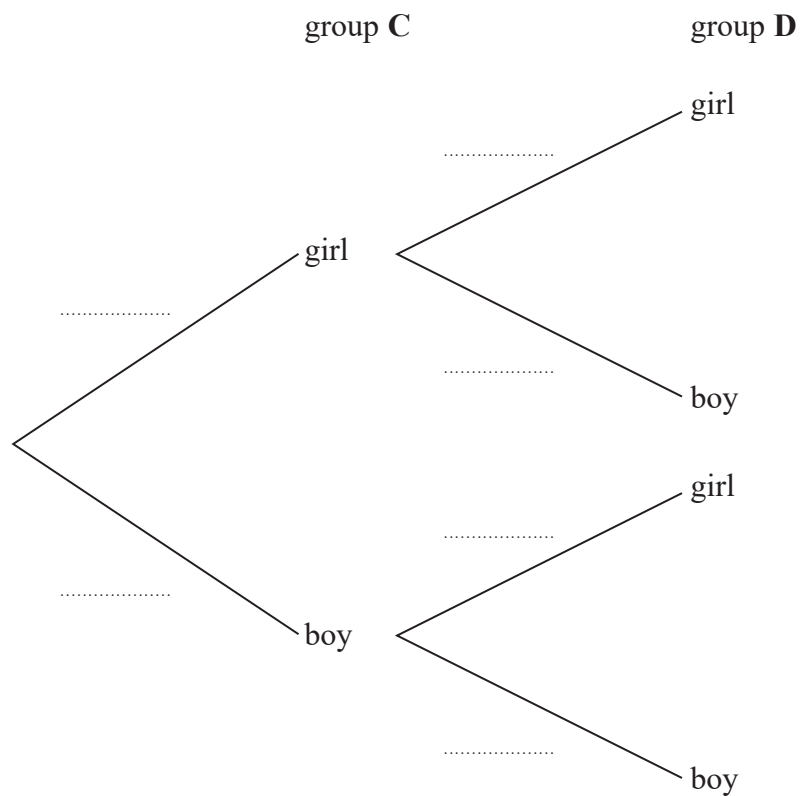
(3)

(Total for Question 13 is 7 marks)



P 6 8 7 2 7 A 0 1 7 3 2

- (a) Complete the probability tree diagram.



(2)

- (b) Work out the probability that there are two boys in the team.

(2)

DO NOT WRITE IN THIS AREA

DO NOT WRITE IN THIS AREA

DO NOT WRITE IN THIS AREA

After the first team has been picked, a second team is picked.

One child is picked at random from the children left in group **C** and one child is picked at random from the children left in group **D**.

(c) Work out the probability that there are two boys in each of the two teams.

.....
(3)

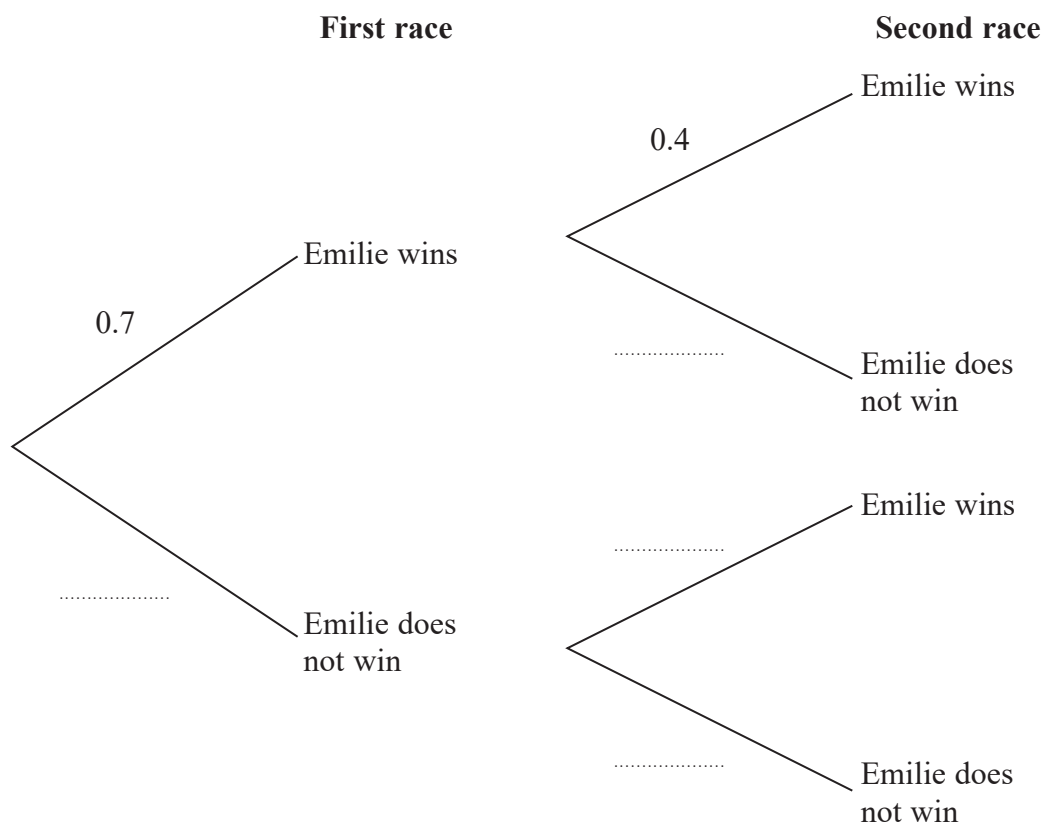
(Total for Question 13 is 7 marks)



13 Emilie takes part in two races.

The probability that she wins the first race is 0.7
 The probability that she wins the second race is 0.4
 The outcomes of the two races are independent.

(a) Complete the probability tree diagram.



(2)

(b) Work out the probability that Emilie wins exactly one of the two races.

(3)

DO NOT WRITE IN THIS AREA

DO NOT WRITE IN THIS AREA

DO NOT WRITE IN THIS AREA



DO NOT WRITE IN THIS AREA

DO NOT WRITE IN THIS AREA

DO NOT WRITE IN THIS AREA

Emilie is going to take part in a third race.

If she wins both of the first two races, the probability that she will win the third race is 0.6

If she wins exactly one of the first two races, the probability that she will win the third race is 0.3

(c) Work out the probability that Emilie will win exactly two of the three races.

.....
(3)

(Total for Question 13 is 8 marks)

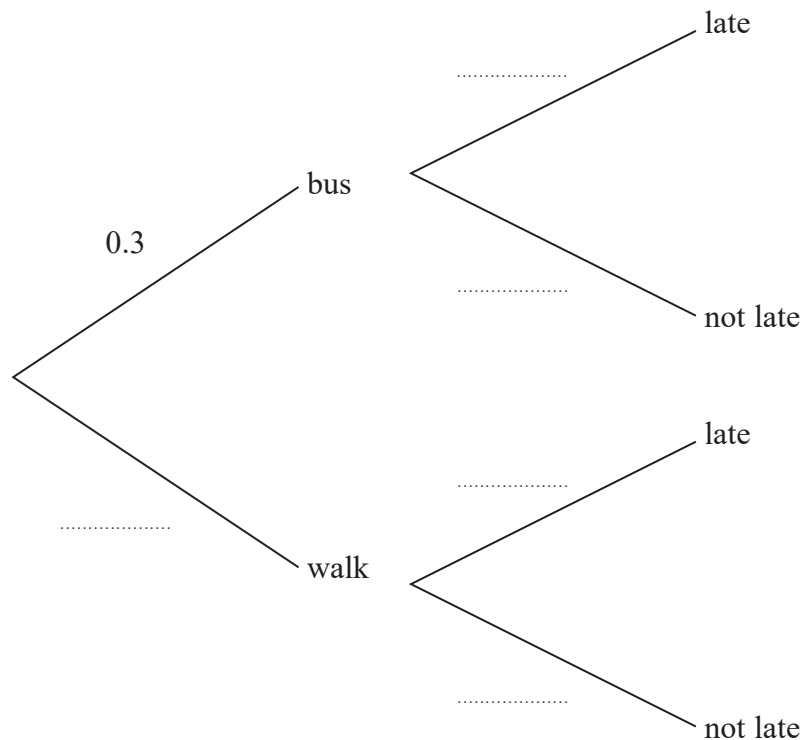


- 14 Each day that Barney goes to college, he either goes by bus or he walks.
The probability that Barney will go to college by bus on any day is 0.3

When Barney goes to college by bus, the probability that he will be late is 0.2

When Barney walks to college, the probability that he will be late is 0.1

- (a) Complete the probability tree diagram.



(2)

Barney will go to college on 200 days next year.

- (b) Work out an estimate for the number of days Barney will be late for college next year.

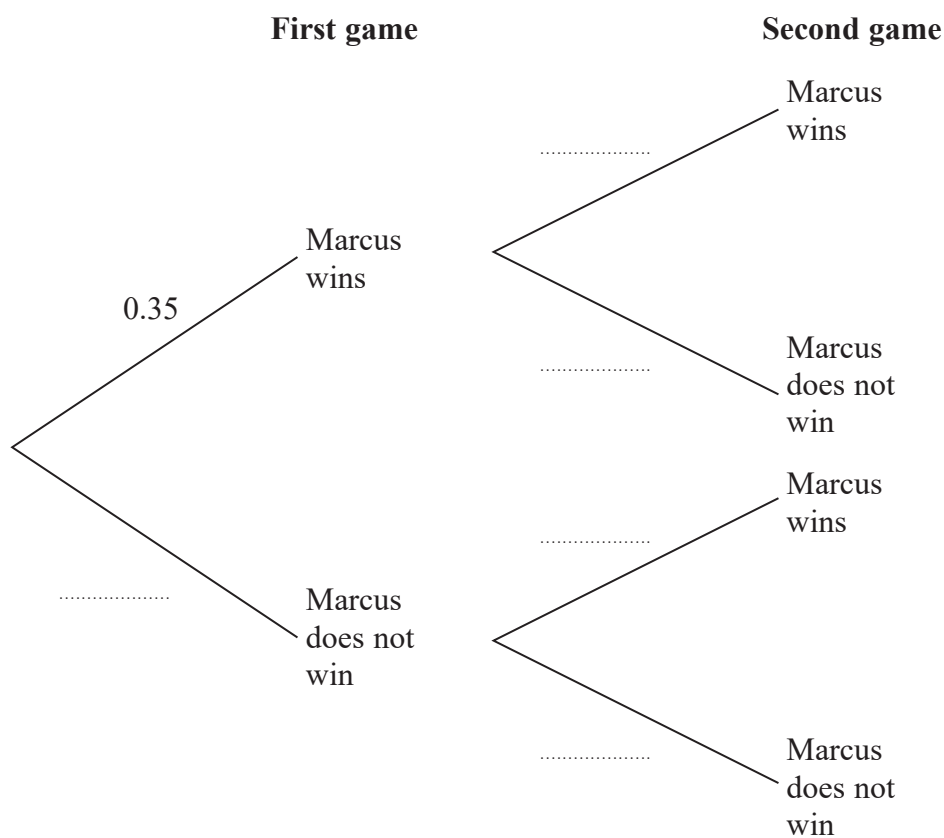
(4)

(Total for Question 14 is 6 marks)



- 14 Marcus plays two games of tennis.
For each game, the probability that Marcus wins is 0.35

(a) Complete the probability tree diagram.



(2)

- (b) Work out the probability that Marcus wins at least one of the two games of tennis.

(3)

(Total for Question 14 is 5 marks)

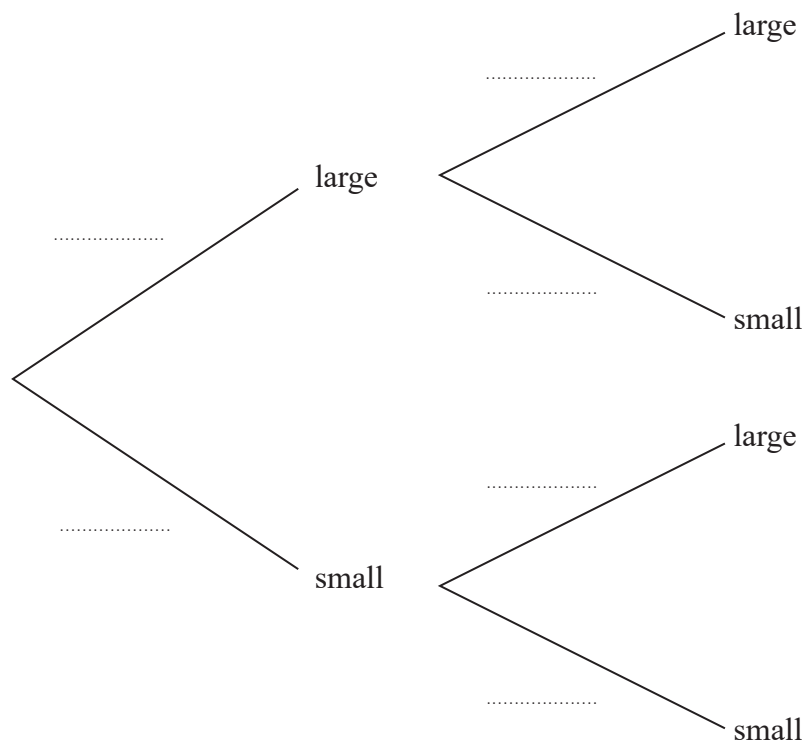


14 There are 20 glasses in a cupboard.

13 of the glasses are large
7 of the glasses are small

Roberto takes at random two glasses from the cupboard.

(a) Complete the probability tree diagram.



(2)

(b) Work out the probability that Roberto takes two small glasses.

(2)

(Total for Question 14 is 4 marks)

DO NOT WRITE IN THIS AREA

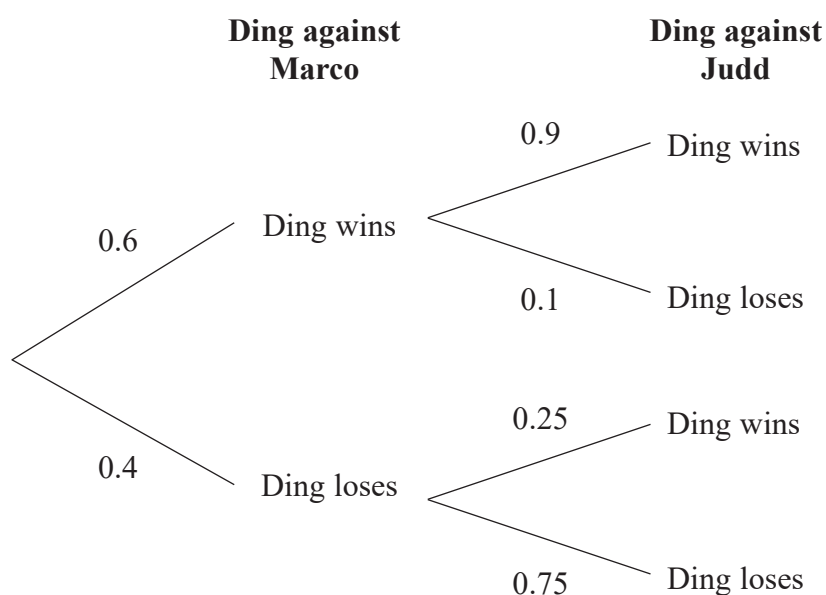
DO NOT WRITE IN THIS AREA

DO NOT WRITE IN THIS AREA



- 14 Ding is going to play one game of snooker against each of two of his friends, Marco and Judd.

The probability tree diagram gives information about the probabilities that Ding will win or lose each of these two games.



- (a) Work out the probability that Ding will win both games.

.....
(2)

- (b) Work out the probability that Ding will win exactly one of the games.

.....
(3)

(Total for Question 14 is 5 marks)



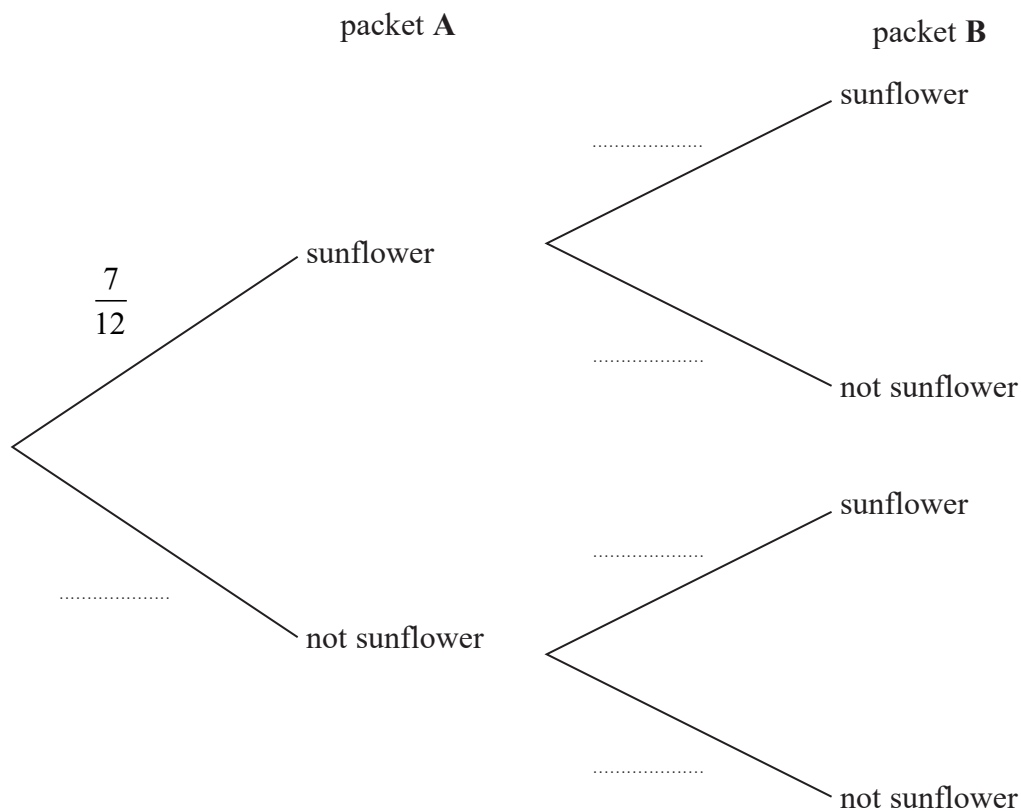
14 Aika has 2 packets of seeds, packet A and packet B

There are 12 seeds in packet A and 7 of these are sunflower seeds.

There are 15 seeds in packet B and 8 of these are sunflower seeds.

Aika is going to take at random a seed from packet A and a seed from packet B

(a) Complete the probability tree diagram.



(2)

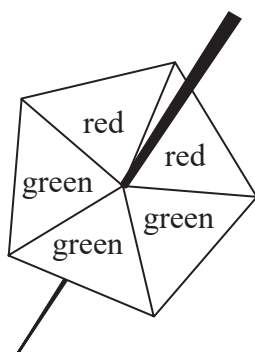
(b) Calculate the probability that Aika will take two sunflower seeds.

(2)

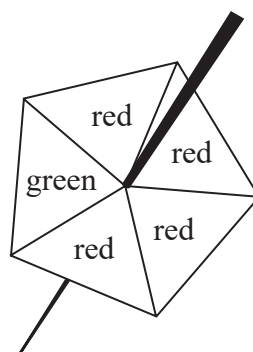
(Total for Question 14 is 4 marks)



15 Harry has two fair 5-sided spinners.



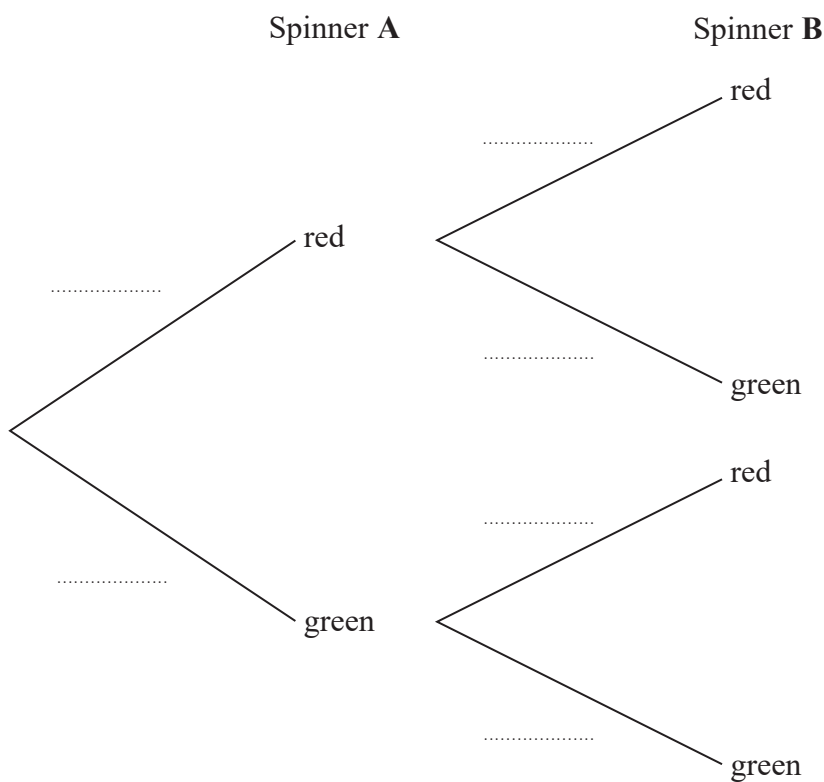
Spinner A



Spinner B

Harry is going to spin each spinner once.

(a) Complete the probability tree diagram.



(2)

DO NOT WRITE IN THIS AREA

DO NOT WRITE IN THIS AREA

DO NOT WRITE IN THIS AREA



(b) Work out the probability that at least one of the spinners will land on green.

.....
(3)

(Total for Question 15 is 5 marks)

DO NOT WRITE IN THIS AREA

DO NOT WRITE IN THIS AREA

DO NOT WRITE IN THIS AREA



- (a) Complete the probability tree diagram.

(2)



For each game of chess,

the winner gets 2 points and the loser gets 0 points,
when the game is drawn, each player gets 1 point.

- (b) Work out the probability that, after 2 games, Magnus and Garry have the same number of points.

.....
(3)

Magnus and Garry now play a third game of chess.

- (c) Work out the probability that, after 3 games, Magnus and Garry have the same number of points.

.....
(3)

(Total for Question 15 is 8 marks)



15 Here are 9 cards. Each card has either a number on it or a letter on it.

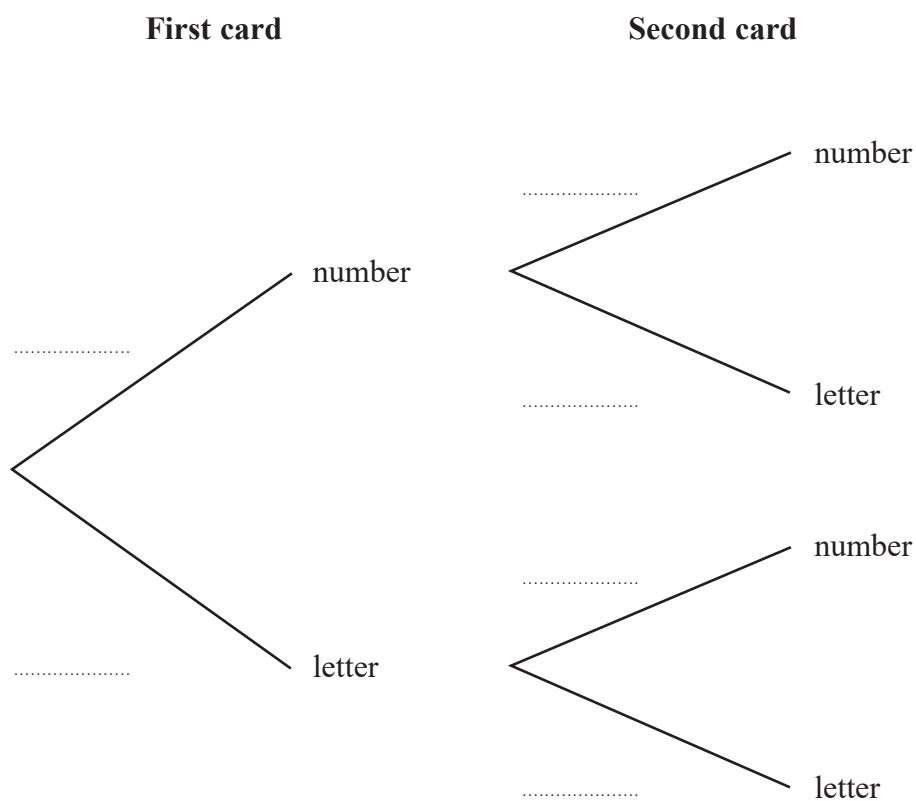


Tomas is playing a game.

Tomas takes at random one of the cards and keeps it.

Tomas then takes at random another card and keeps it.

(a) Complete the probability tree diagram.



(2)

DO NOT WRITE IN THIS AREA

DO NOT WRITE IN THIS AREA

DO NOT WRITE IN THIS AREA



(b) Work out the probability that each of the two cards has a number on it.

.....
(2)

(c) Work out the probability that there will be one card with a number on it and one card with a letter on it.

.....
(3)

(Total for Question 15 is 7 marks)



15 There are two bags of counters, bag X and bag Y.

There are 20 counters in bag X.

11 of the counters are blue and the rest are red.

There are 16 counters in bag Y.

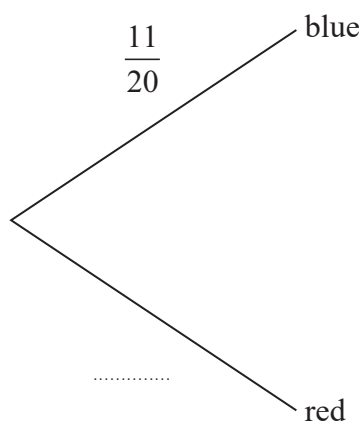
9 of the counters are blue and the rest are red.

Arkady takes at random a counter from bag X and takes at random a counter from bag Y.

(a) Complete the probability tree diagram.

bag X

bag Y



(3)

DO NOT WRITE IN THIS AREA

DO NOT WRITE IN THIS AREA

DO NOT WRITE IN THIS AREA



DO NOT WRITE IN THIS AREA

DO NOT WRITE IN THIS AREA

DO NOT WRITE IN THIS AREA

(b) Work out the probability that the two counters are both red.

.....
(2)

(c) Work out the probability that the two counters are both red or are both blue.

.....
(3)

(Total for Question 15 is 8 marks)



P 5 9 0 1 2 A 0 1 5 2 4

16 Cody has two bags of counters, bag A and bag B.

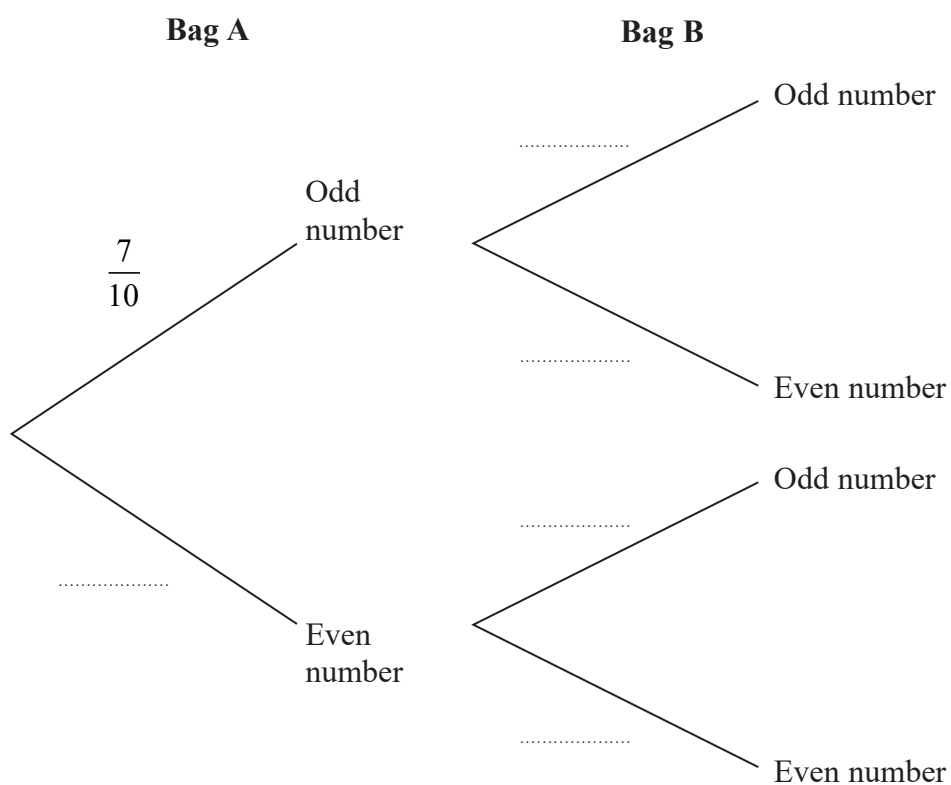
Each of the counters has either an odd number or an even number written on it.

There are 10 counters in bag A and 7 of these counters have an **odd** number written on them.

There are 12 counters in bag B and 7 of these counters have an **odd** number written on them.

Cody is going to take at random a counter from bag A and a counter from bag B.

(a) Complete the probability tree diagram.



(2)

DO NOT WRITE IN THIS AREA

DO NOT WRITE IN THIS AREA

DO NOT WRITE IN THIS AREA

